



# La chiave di basso

## Le note fuori dal pentagramma - esercizio nr.2


Utilizzando la penna nera, disegna le note in corrispondenza dei rispettivi nomi.




Do4 Re2 Mi2 Si3 Re4 Mi2 Do4 Re4 Fa2 Si3 Re2 Do4



Si4 Mi2 Do4 Re4 Fa2 Si3 Re2 Do4 Do4 Re2 Mi2 Si3




Do4 Re4 Fa2 Si3 Re2 Do4 Fa2 Re2 Mi2 Re4 Si3 Mi2




Fa2 Si3 Re2 Do4 Fa2 Re2 Mi2 Re4 Si3 Mi2 Do4 Re4



Re2 Do4 Fa2 Re2 Mi2 Re4 Si3 Mi2 Do4 Re4 Fa2 Si3



Fa2 Re2 Mi2 Re4 Si3 Mi2 Do4 Re4 Fa2 Si3 Re2 Do4



Mi2 Re4 Si3 Mi2 Do4 Re4 Fa2 Si3 Re2 Do4 Fa2 Re2